

Preparatory Rudiments of Music

Unit II Rhythm & Meter

Lesson: *Note Values*

Worksheets

<http://evdokimoff.net>

Table of Contents

2.1 Whole-Notes.....	3
2.2 Half-Notes.....	3
2.3 Quarter-Notes.....	4
2.4 Eighth-Notes.....	4
2.5 Note Tree.....	5
2.6 Rests.....	6
2.7 Dotted Notes & Rests.....	7

2.1 Whole-Notes

2.1.1 Practice writing whole-notes on both lines and spaces:




2.2 Half-Notes

2.2.1 Practice writing half-notes on both lines and spaces.


Notice that:

1. The note-head is an oval on a slant of about 45 degrees
2. The stem is three-and-a-half spaces long
3. The stem joins at the note-head but does not go past it
4. Notes below the middle line should be stems up, below stems down.




2.3 Quarter-Notes

2.3.1 Practice writing quarter-notes both on lines and spaces. Draw these notes like half-notes with the note-head filled in:




2.4 Eighth-Notes

2.4.1 Practice writing eighth-notes both on lines and spaces. Notes below the middle line should be stems up, below stems down:



2.4.2 Practice writing beamed eighth-notes, two notes per group:




2.5 Note Tree

2.5.1 Answer the following questions:


2 eighth-notes	=	<u>1</u> quarter-note
1 whole-note	=	__ half-notes
4 eighth-notes	=	__ quarter-notes
1 half-note	=	__ eighth-notes
1 whole-note	=	__ quarter-notes
1 quarter-note	=	__ eighth-notes
1 half-note	=	__ quarter-notes
4 quarter-notes	=	__ half-notes
4 eighth-notes	=	__ half-notes
2 quarter-notes	=	__ eighth-notes
8 eighth-notes	=	__ whole-notes

2.6 Rests


2.6.1 Practice writing whole-note rests. Notice that they hang from the fourth line:




2.6.2 Practice writing half-note rests. Notice that they sit on the third line:



2.6.3 Practice writing quarter-note rests. They extend from the middle of the top space to the middle of the bottom space:



2.6.4 Practice writing eighth-note rests. They fall between the second and fourth line:



2.7 Dotted Notes & Rests

2.7.1 Answer the following questions

1 dotted whole-note = ___ half-notes

1 dotted half-note = ___ quarter-notes

1 dotted quarter-note = ___ eighth-notes

2 dotted whole-notes = 6 _____

3 dotted quarter-notes = 9 _____

1 dotted quarter-note = ___ quarter-note + ___ eighth-notes

2 dotted whole-note rests = ___ whole-notes + ___ half-notes

3 dotted half-notes = ___ half-notes + ___ quarter-notes